


Fraction Worksheets

Name: _____

Date: _____


Copy the fraction equations. Say it. Draw it. Write it.




$$\frac{1}{2}$$




$$\frac{2}{4} = \frac{1}{2}$$




$$\frac{3}{6} = \frac{1}{2}$$



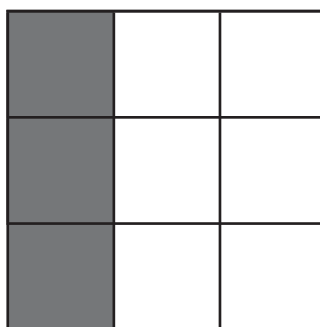
$$\frac{4}{8} = \frac{1}{2}$$




$$\frac{1}{3}$$




$$\frac{2}{6} = \frac{1}{3}$$




$$\frac{3}{9} = \frac{1}{3}$$



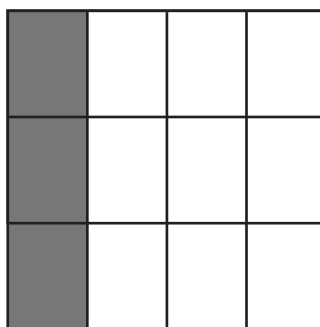
$$\frac{4}{12} = \frac{1}{3}$$



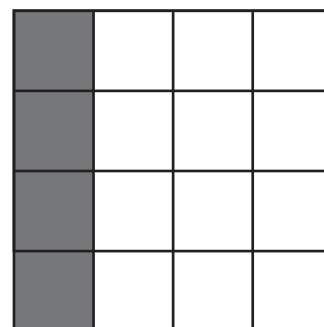
$$\frac{1}{4}$$



$$\frac{2}{8} = \frac{1}{4}$$



$$\frac{3}{12} = \frac{1}{4}$$



$$\frac{4}{16} = \frac{1}{4}$$